


<https://www.youtube.com/watch?v=OE1MHaoJR9o>

Counting in 10s

Time for Telling the Time!



Time to the hour

1.



2.



3.



4.

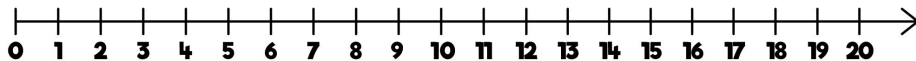


Date F15.01.21

Title Addition within 20.



1) What is $9 + 4$?




2) Work out $8 + 4$

3) Compare using $<$, $>$ or $=$

$$13 + 1 \bigcirc 15 - 1$$

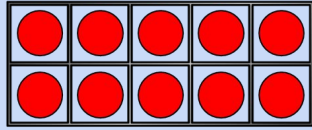
4) Name the shape.



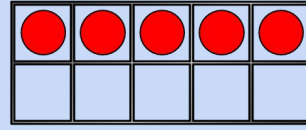
Input

Making 10

If

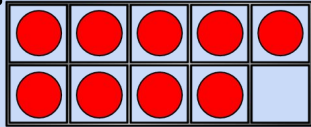


+

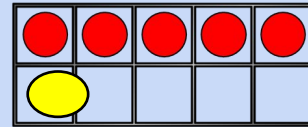


$$10 + 5 = 15$$

Then




+




$$9 + 6 = 15$$

Counting on



What number is this?

14

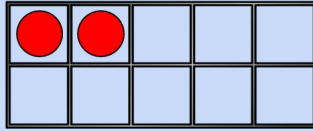
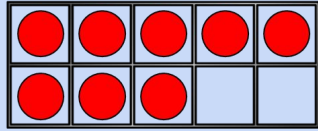


What number is this?

13

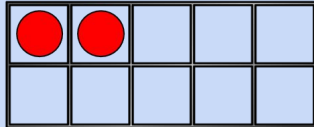
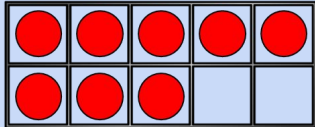
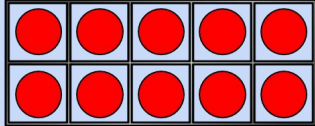
Using number bonds.

If



$$8 + 2 = 10$$

Then



$$18 + 2 = 20$$

$$8 + 12 = 20$$

Using all you have learnt about addition answer these questions:

1.	$10 + 4 =$
2.	$11 + 6 =$
3.	$9 + 5 =$
4.	$9 + 8 =$
5.	$12 + 8 =$
6.	$15 + 5 =$
7.	$17 + 3 =$
8.	$5 + 11 =$
9.	$2 + 16 =$
10.	$1 + 19 =$

